









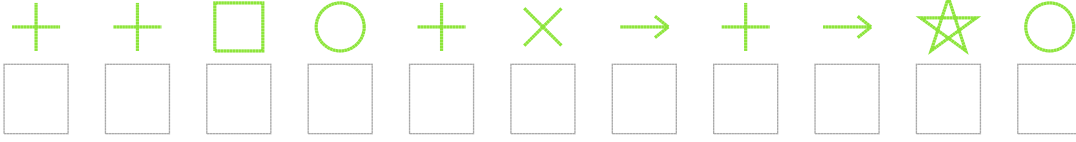


# Şekil Sayı Eşleştirme

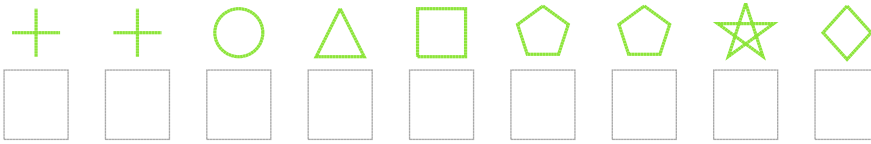
 = 7	 = 2	 = 5	 = 8	 = 9	 = 0	 = 1	 = 3	 = 4	 = 6
--	--	--	--	--	--	---	--	--	--

Aşağıdaki uzun şifreleri hatasız çözerek altlarına yazın:

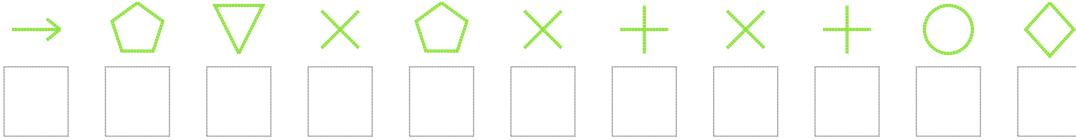
1. Şifre



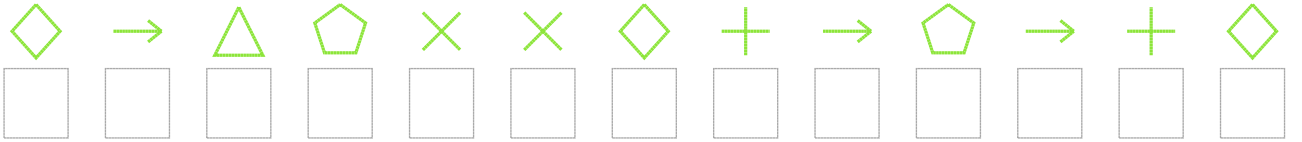
2. Şifre



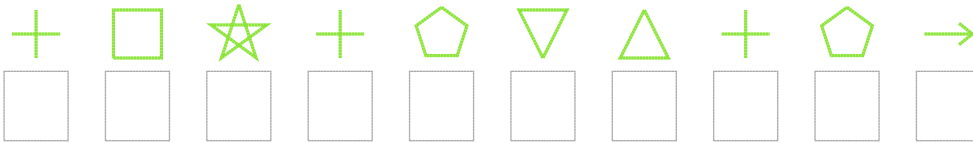
3. Şifre



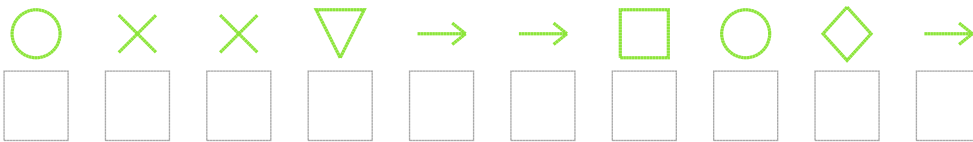
4. Şifre



5. Şifre



6. Şifre



7. Şifre



❑ BONUS: 6. ve 1. şifrenin üçüncü rakamının toplamı kaçtır? .....

## Cevap Anahtarı

1. Şifre: 88918038371

2. Şifre: 881496675

3. Şifre: 36206080815

4. Şifre: 5346005836385

5. Şifre: 8978624863

6. Şifre: 1002339153

7. Şifre: 711160713920

□ Bonus Soru Cevabı: 9